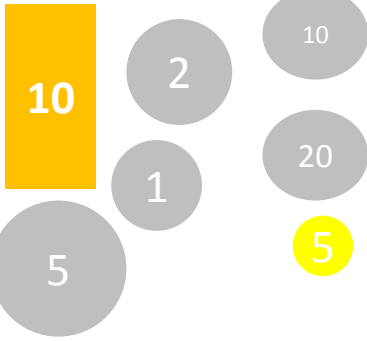
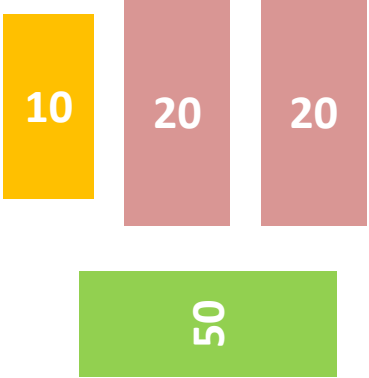
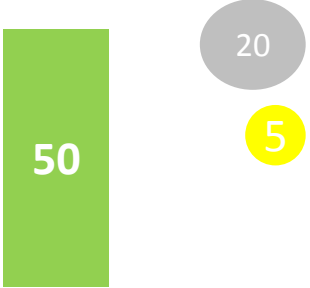
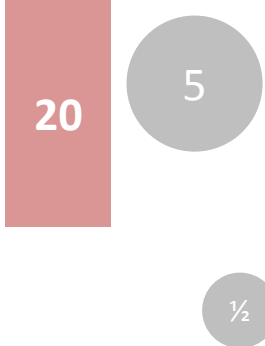
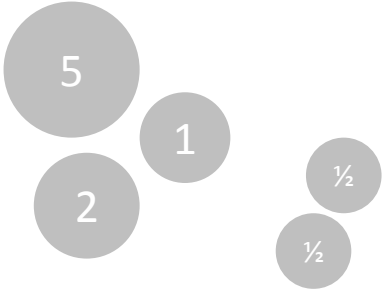
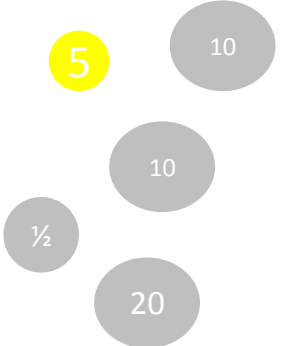
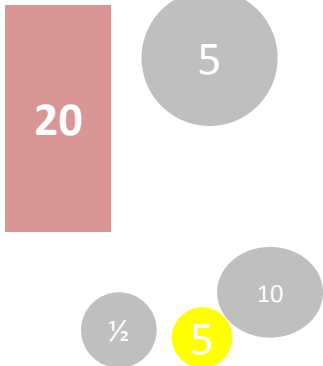




Wie viel Geld ist es?

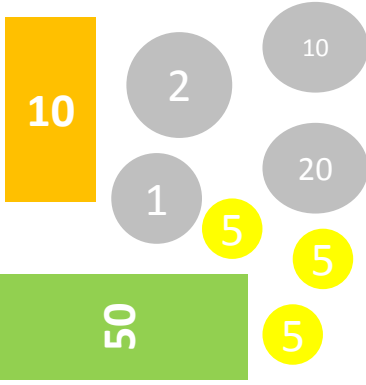
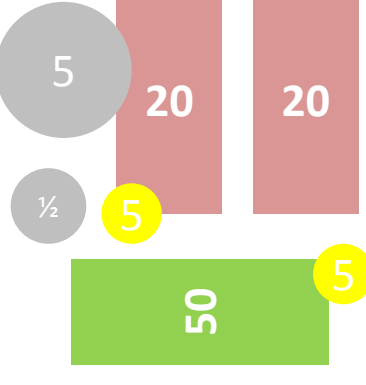
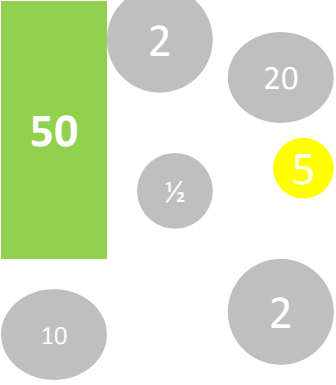
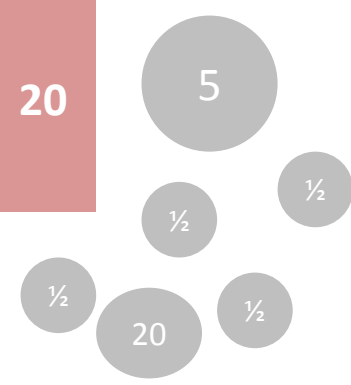
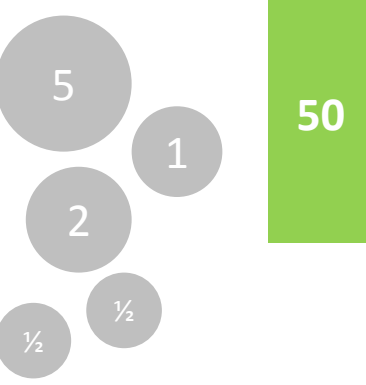
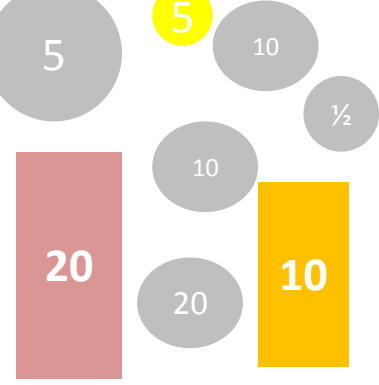
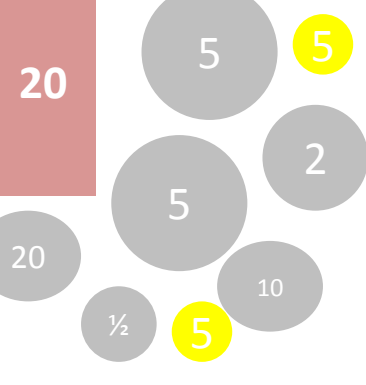
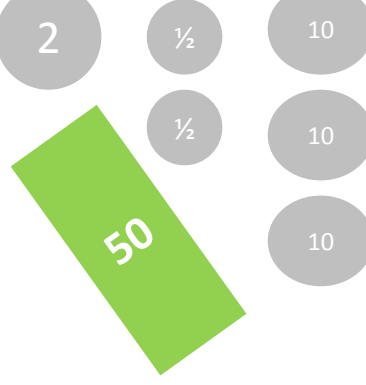

		
		
		

Lösung: Wie viel Geld ist es? ★

<p>18 Fr. 35 Rp.</p>	<p>100 Fr.</p>	<p>50 Fr. 25 Rp.</p>
<p>25 Fr. 50 Rp.</p>	<p>9 Fr.</p>	<p>95 Rp.</p>
<p>25 Fr. 65 Rp.</p>	<p>6 Fr. 30 Rp.</p>	<p>80Rp.</p>

Wie viel Geld ist es? ★ ★

Lösung: Wie viel Geld ist es? ★ ★

		
63 Fr. 45 Rp.	95 Fr. 60 Rp.	54 Fr. 85 Rp.
		
27 Fr. 20 Rp.	59 Fr.	35 Fr. 95 Rp.
		
32 Fr. 90 Rp.	53 Fr. 30 Rp.	1 Fr.

Wie viel Geld ist es? ★ ★ ★

Lösung: Wie viel Geld ist es?



<p>64 Fr. 15 Rp.</p>	<p>91 Fr. 50 Rp.</p>	<p>60 Fr. 95 Rp.</p>
<p>29 Fr. 80 Rp.</p>	<p>109 Fr.</p>	<p>36 Fr. 25 Rp.</p>
<p>112 Fr. 90 Rp.</p>	<p>60 Fr. 30 Rp.</p>	<p>51 Fr. 5 Rp.</p>