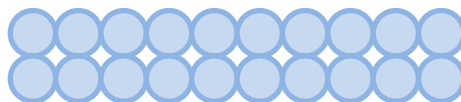

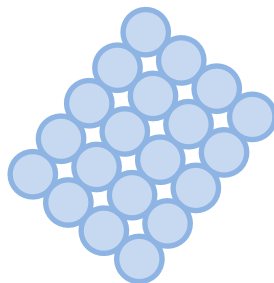
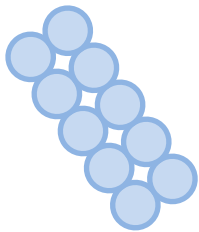






Schneeballschlacht


Schreibe die passenden Malrechnungen und die Ergebnisse auf.



Lösung: Schneeballschlacht



Schreibe die passenden Malrechnungen und die Ergebnisse auf.

$3 \cdot 3 = 9$



$3 \cdot 5 = 15$

$5 \cdot 3 = 15$



$6 \cdot 5 = 30$


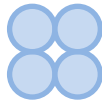
$5 \cdot 6 = 30$

$1 \cdot 2 = 2$

$2 \cdot 1 = 2$

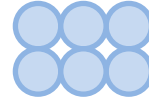


$2 \cdot 2 = 4$



$3 \cdot 2 = 6$

$2 \cdot 3 = 6$

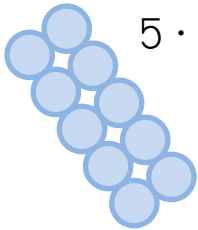


$3 \cdot 2 = 6$

$2 \cdot 3 = 6$


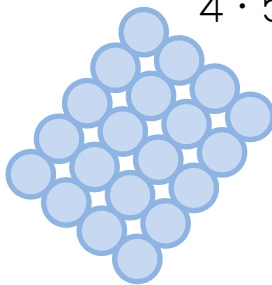
$2 \cdot 5 = 10$

$5 \cdot 2 = 10$



$5 \cdot 4 = 20$

$4 \cdot 5 = 20$



$5 \cdot 8 = 40$

$8 \cdot 5 = 40$

$1 \cdot 3 = 3$

$3 \cdot 1 = 3$

$1 \cdot 1 = 1$



$2 \cdot 10 = 20$

$10 \cdot 2 = 20$

