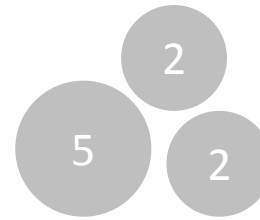
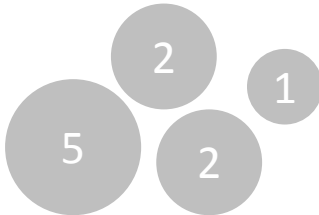


Wie viele Franken haben diese Kinder?




___ Fr.












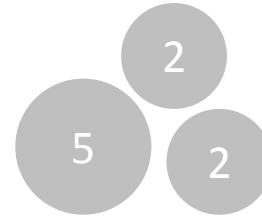




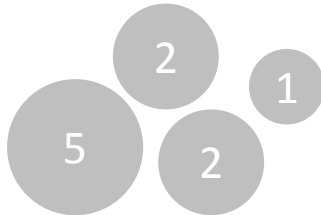
Lösung: Wie viele Franken haben diese Kinder? ★




8 Fr.




9 Fr.



10 Fr.




9 Fr.




12 Fr.



11 Fr.




13 Fr.




6 Fr.

Wie viele Franken haben diese Kinder?





___ Fr.













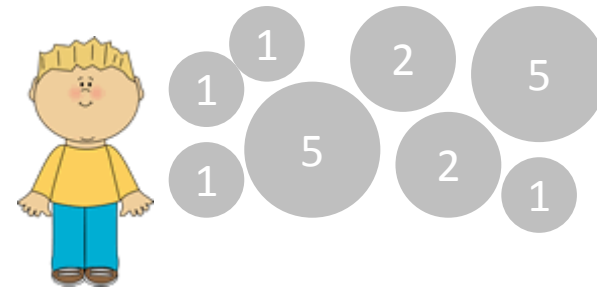





Lösung: Wie viele Franken haben diese Kinder? ★ ★




18 Fr.




18 Fr.




24 Fr.



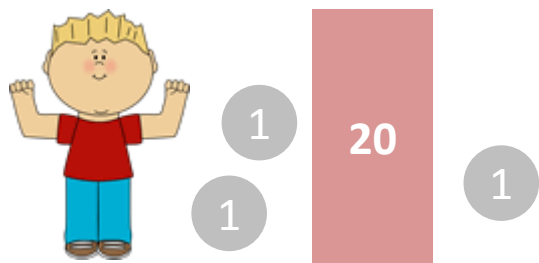
20 Fr.




22 Fr.



13 Fr.



23 Fr.



11 Fr.

Wie viele Franken haben diese Kinder?



Illustration of a girl with red hair. She has two yellow rectangular bills labeled '10' and four grey circular coins: one labeled '5', one labeled '2', and two labeled '1'. To the right of the coins is a blank line followed by 'Fr.'.

Illustration of a boy with blonde hair. He has one yellow rectangular bill labeled '10' and ten grey circular coins: one labeled '5', two labeled '2', and seven labeled '1'. To the right of the coins is a blank line.

Illustration of a boy with dark skin. He has one red rectangular bill labeled '20' and four grey circular coins, each labeled '2'. To the right of the coins is a blank line.

Illustration of a girl with dark skin and pigtails. She has one yellow rectangular bill labeled '10' and seven grey circular coins: one labeled '5', two labeled '2', and four labeled '1'. To the right of the coins is a blank line.


Illustration of a girl with dark hair. She has one yellow rectangular bill labeled '10' and five grey circular coins: one labeled '5', two labeled '2', and two labeled '1'. To the right of the coins is a blank line.

Illustration of a boy with dark hair. He has one yellow rectangular bill labeled '10' and six grey circular coins: one labeled '5', two labeled '2', and three labeled '1'. To the right of the coins is a blank line.

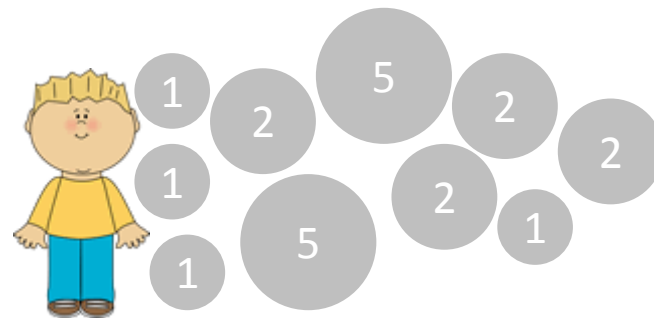
Illustration of a boy with blonde hair. He has one red rectangular bill labeled '20' and five grey circular coins: one labeled '5', two labeled '2', and two labeled '1'. To the right of the coins is a blank line.

Illustration of a girl with blonde hair. She has one yellow rectangular bill labeled '10' and ten grey circular coins: two labeled '5', two labeled '2', and six labeled '1'. To the right of the coins is a blank line.

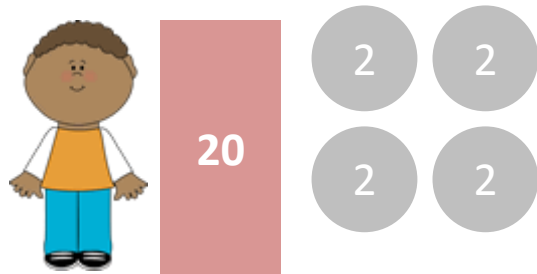
Lösung: Wie viele Franken haben diese Kinder?



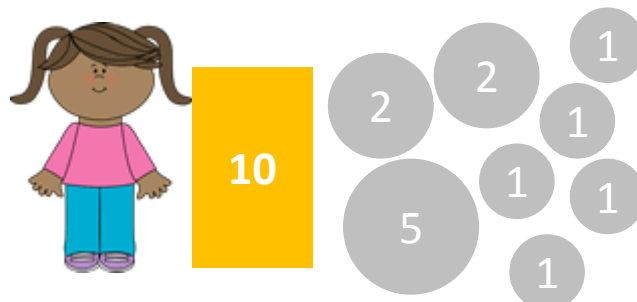
28 Fr.



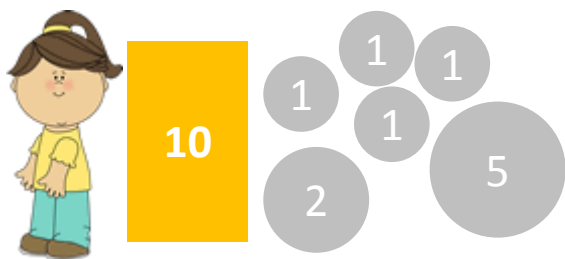
22 Fr.




28 Fr.



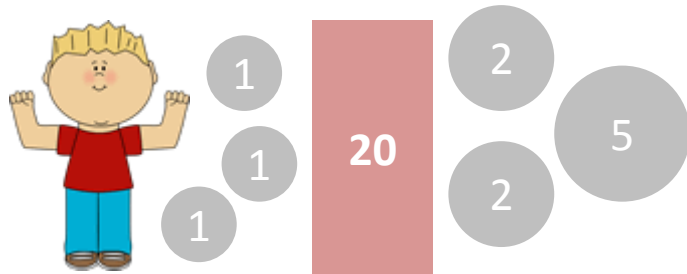
24 Fr.




21 Fr.



23 Fr.



32 Fr.



21 Fr.

Verbinde:



2

1 2 1

20 Fr.

10

1 1 1

10 Fr.

5

10 10

2 Fr.

20

5 5

3 Fr.

2 2

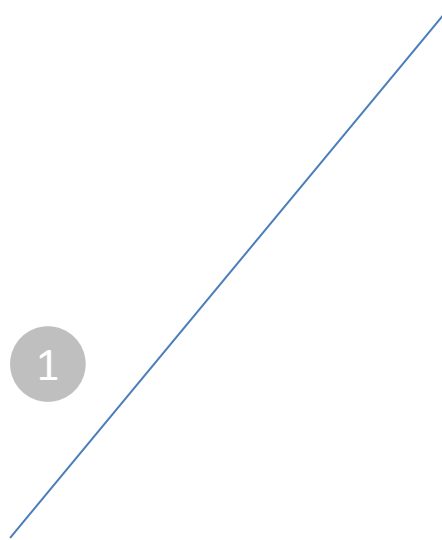
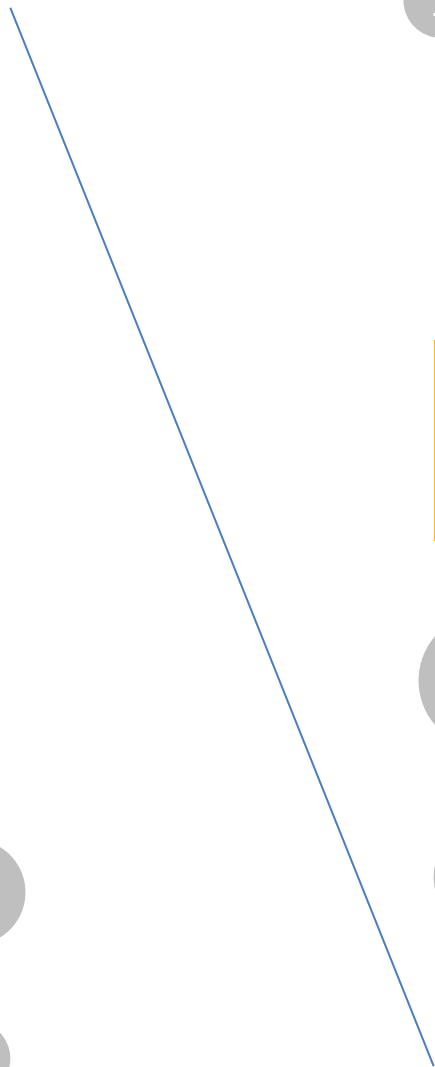
2 1 1 1

5 Fr.

2 1

1 1

4 Fr.



Lösung: Verbinde: 



20 Fr.

10 Fr.

2 Fr.

3 Fr.

5 Fr.

4 Fr.

2

10

5

20

2 2

2 1

1 2 1

1 1 1

10 10

5 5

2 1 1 1

1 1

Verbinde:



22 Fr.



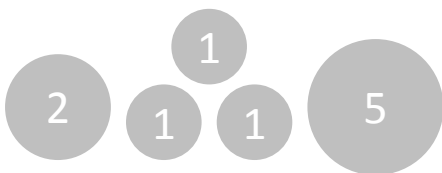
15 Fr.



12 Fr.




23 Fr.




10 Fr.

Lösung: Verbinde:



22 Fr.



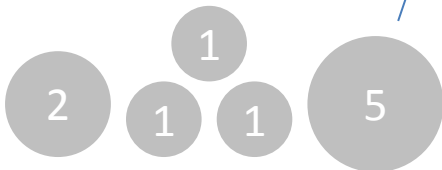
15 Fr.



12 Fr.




23 Fr.




10 Fr.


Verbinde:



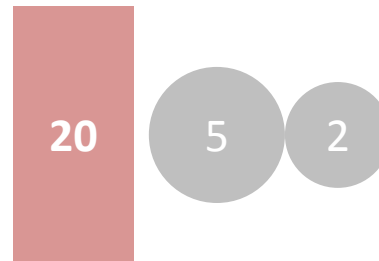
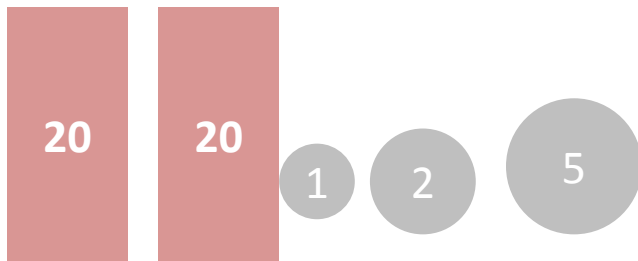
32 Fr.




27 Fr.



37 Fr.



23 Fr.



38 Fr.

Lösung: Verbinde: ★★

