

ZAHLEN ORDNEN

SCHREIBE DIE ZAHLEN IN DER RICHTIGEN REIHENFOLGE AUF:

16 ~~0~~ ~~5~~ 13 22 6

0 5




10 3 9 6 11 7

21 12 23 13 3 8

4 6 9 8 11 2


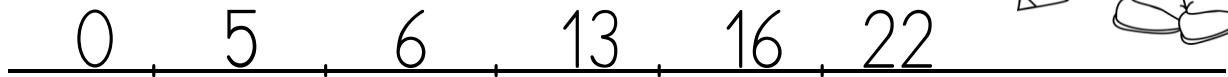
15 17 1 14 16




ZAHLEN ORDNEN - LÖSUNG

SCHREIBE DIE ZAHLEN IN DER RICHTIGEN REIHENFOLGE AUF:

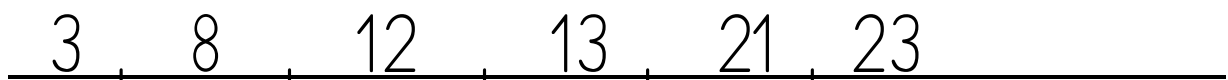
16 0 ~~5~~ 13 22 6




10 3 9 6 11 7



21 12 23 13 3 8



4 6 9 8 11 2



15 17 1 14 16 22

